

Recognising notes



1 Match the note to its value.



5 pounds

20 pounds

10 pounds

50 pounds

2 Dan has two £10 notes and one £5 note.

Circle the notes that Dan has.





3 Here are some notes.



Complete the sentences.

There are £5 notes.

There are £10 notes.

There are £20 notes.

There are £50 notes.

4 Tick the note with the smaller value.

a)




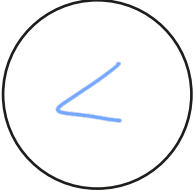
b)






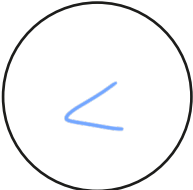
c)




5 Write $<$, $>$ or $=$ to compare the amounts.

a)   50 pounds

b) 20 pounds  

c)   10 pounds

6 Kim has some money.



I have a 30 pound note.

Do you agree with Kim? NO

Talk about your answer.

