
















# Check Your Change from £10

Check the change the shopkeeper has given you.
















Is it the correct amount, or have they made a mistake?

| You buy   | You pay   | Your change   | Correct or incorrect? | Correct change required |
|---|---|---|-----------------------|-------------------------|
|  <p>£8.99</p>   |    |    |                       |                         |
|  <p>£9.75</p>  |   |   |                       |                         |
|  <p>£9.10</p> |  |  |                       |                         |
|  <p>£8.50</p> |  |  |                       |                         |
|  <p>£7.50</p> |  |  |                       |                         |

# Check Your Change from £10 Answers

Check the change the shopkeeper has given you.
















Is it the correct amount, or have they made a mistake?

| You buy  | You pay   | Your change   | Correct or incorrect?<br>✓ X | Correct change required |
|--|---|---|------------------------------|-------------------------|
| <br>£8.99    |    |    | ✓                            | £1 and 1p               |
| <br>£9.75   |   |   | ✓                            | 25p                     |
| <br>£9.10  |  |  | X                            | 90p                     |
| <br>£8.50 |  |  | ✓                            | £1 and 50p              |
| <br>£7.50  |  |  | X                            | £2 and 50p              |

# Check Your Change from £10

Check the change the shopkeeper has given you.
















Is it the correct amount, or have they made a mistake?

| You buy   | You pay   | Your change   | Correct or incorrect? | Correct change required |
|---|---|---|-----------------------|-------------------------|
|  <p>£7.50</p>   |    |    |                       |                         |
|  <p>£8.99</p>  |  |   |                       |                         |
|  <p>£9.62</p> |  |  |                       |                         |
|  <p>£6.79</p> |  |  |                       |                         |
|  <p>£9.85</p> |  |  |                       |                         |

# Check Your Change from £10 Answers

Check the change the shopkeeper has given you.

Is it the correct amount, or have they made a mistake?

| You buy  | You pay   | Your change   | Correct or incorrect?<br>✓ X | Correct change required |
|--|---|---|------------------------------|-------------------------|
| <br>£7.50   |    |    | X                            | £2 and 20p              |
| <br>£8.99   |  |   | ✓                            | £1 and 1p               |
| <br>£9.62 |  |  | ✓                            | 38p                     |
| <br>£6.79  |  |  | X                            | £3 and 21p              |
| <br>£9.85  |  |  | ✓                            | 15p                     |